
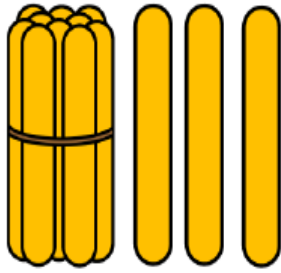



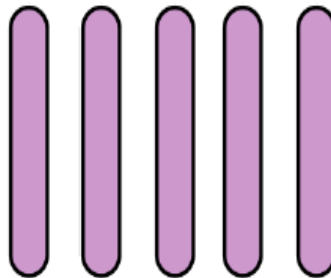
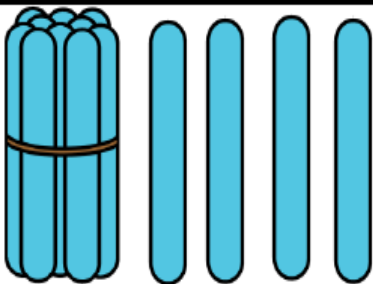
Πρόσθεση αριθμών μέχρι το 20



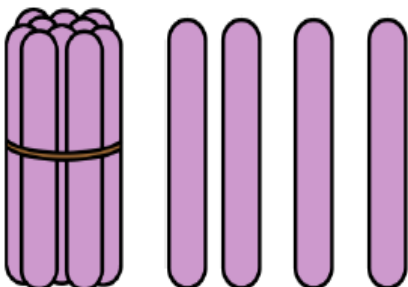
$$\square + \square = \square$$



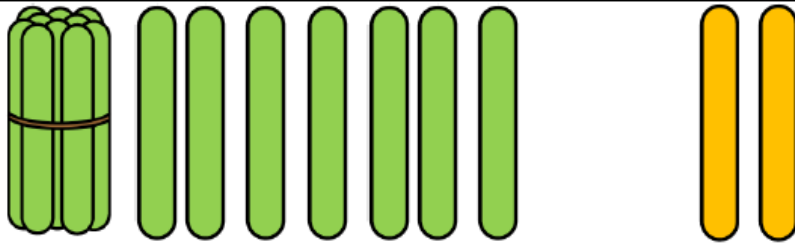
$$\square + \square = \square$$




$$\square + \square = \square$$



$$\square + \square = \square$$



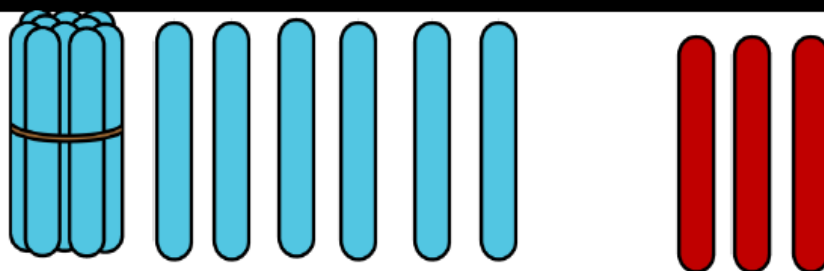
$$\square + \square = \square$$



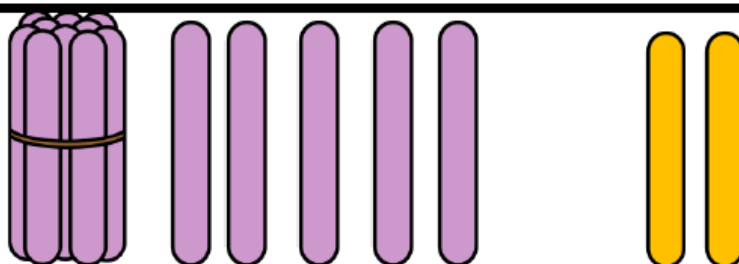
$$\square + \square = \square$$



$$\square + \square = \square$$

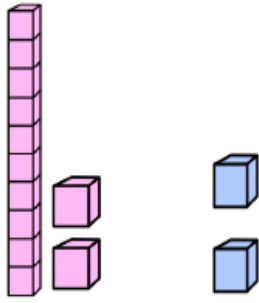


$$\square + \square = \square$$

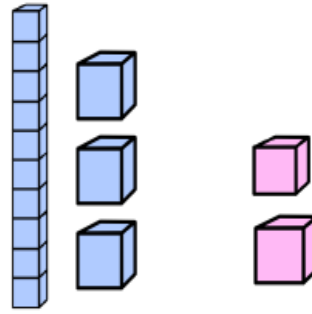


$$\square + \square = \square$$

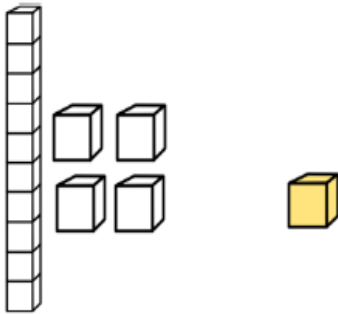
Πρόσθεση αριθμών μέχρι το 20



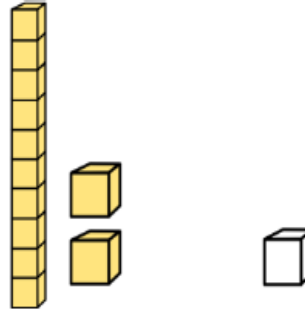
$$\square + \square = \square$$



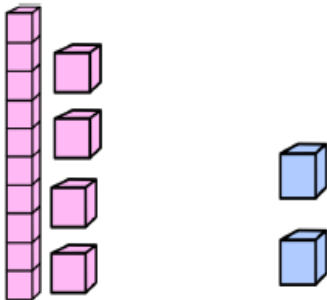
$$\square + \square = \square$$



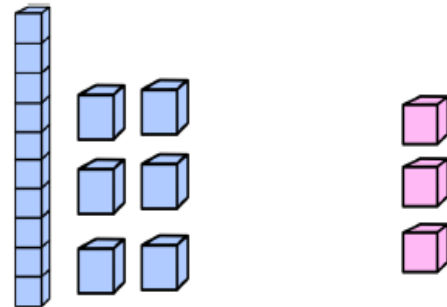
$$\square + \square = \square$$



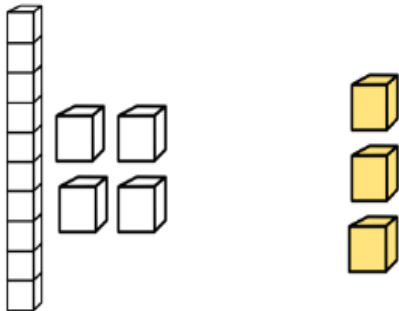
$$\square + \square = \square$$



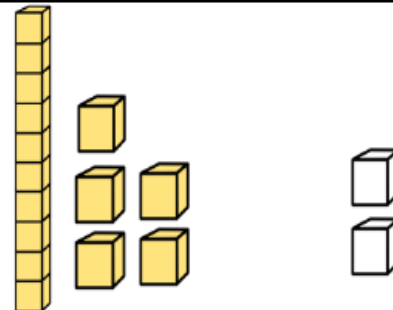
$$\square + \square = \square$$



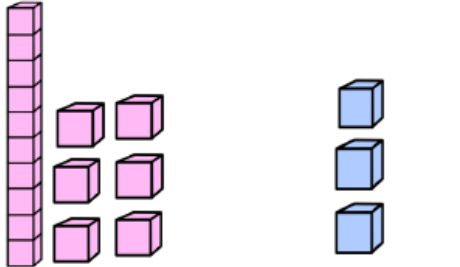
$$\square + \square = \square$$



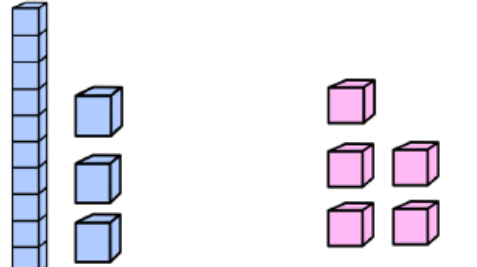
$$\square + \square = \square$$



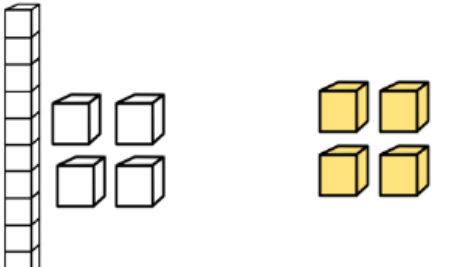
$$\square + \square = \square$$



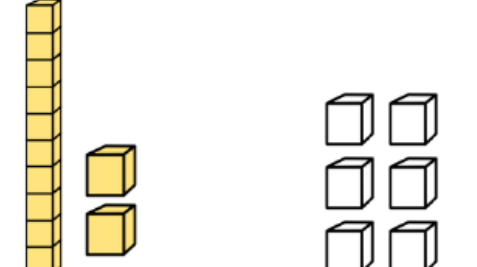
$\square + \square = \square$



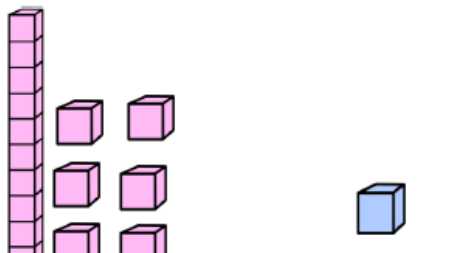
$\square + \square = \square$



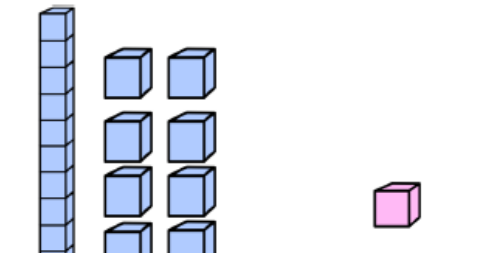
$\square + \square = \square$



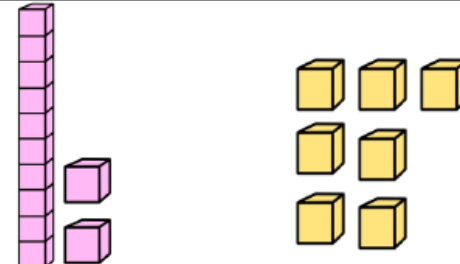
$\square + \square = \square$



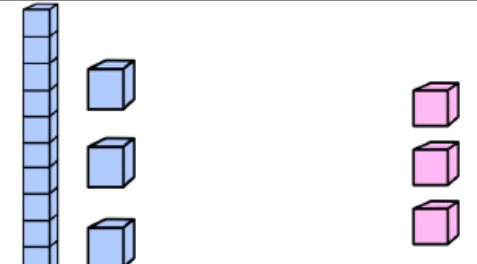
$\square + \square = \square$



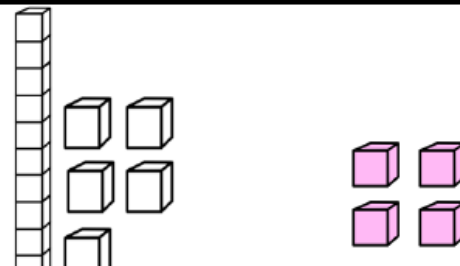
$\square + \square = \square$



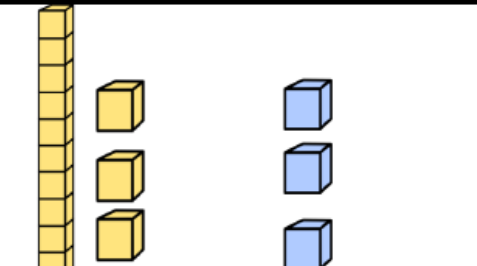
$\square + \square = \square$



$\square + \square = \square$



$\square + \square = \square$



$\square + \square = \square$

Πρόσθεση αριθμών μέχρι το 20



$7 + 2 = \underline{\quad}$

$5 + 3 = \underline{\quad}$

$2 + 3 = \underline{\quad}$

$4 + 4 = \underline{\quad}$

$17 + 2 = \underline{\quad}$

$15 + 3 = \underline{\quad}$

$12 + 3 = \underline{\quad}$

$14 + 4 = \underline{\quad}$

$3 + 3 = \underline{\quad}$

$1 + 6 = \underline{\quad}$

$2 + 4 = \underline{\quad}$


$4 + 3 = \underline{\quad}$

$13 + 3 = \underline{\quad}$

$11 + 6 = \underline{\quad}$

$12 + 4 = \underline{\quad}$

$14 + 3 = \underline{\quad}$



$6 + 2 = \underline{\quad}$

$3 + 3 = \underline{\quad}$

$7 + 2 = \underline{\quad}$

$4 + 1 = \underline{\quad}$

$16 + 2 = \underline{\quad}$

$13 + 3 = \underline{\quad}$

$17 + 2 = \underline{\quad}$

$14 + 1 = \underline{\quad}$

$26 + 2 = \underline{\quad}$

$23 + 3 = \underline{\quad}$

$27 + 2 = \underline{\quad}$

$24 + 1 = \underline{\quad}$

$36 + 2 = \underline{\quad}$

$33 + 3 = \underline{\quad}$

$37 + 2 = \underline{\quad}$

$34 + 1 = \underline{\quad}$



$4 + 14 = \underline{\quad}$

$3 + 12 = \underline{\quad}$

$17 + 2 = \underline{\quad}$

$13 + 2 = \underline{\quad}$

$11 + 4 = \underline{\quad}$

$5 + 13 = \underline{\quad}$

$12 + 4 = \underline{\quad}$

$3 + 13 = \underline{\quad}$

$19 + 1 = \underline{\quad}$

$15 + 4 = \underline{\quad}$

$11 + 5 = \underline{\quad}$

$2 + 17 = \underline{\quad}$

$12 + 6 = \underline{\quad}$

$3 + 13 = \underline{\quad}$

$7 + 11 = \underline{\quad}$

$16 + 3 = \underline{\quad}$

$5 + 14 = \underline{\quad}$

$2 + 18 = \underline{\quad}$

$1 + 11 = \underline{\quad}$

$17 + 3 = \underline{\quad}$

$15 + 5 = \underline{\quad}$

$14 + 4 = \underline{\quad}$

Αφαίρεση αριθμών μέχρι το 20

1. Γράφω τη μαθηματική πρόταση αφαίρεσης, όπως στο παράδειγμα.



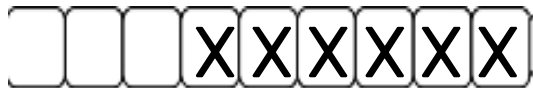
$$16 - 3 = 13$$















2. Διαγράψω σύμφωνα με τη μαθηματική πρόταση αφαίρεσης.

$$15 - 4 = \underline{\quad}$$



$$15 - 1 = \underline{\quad}$$

$$18 - 8 = \underline{\quad}$$



$$18 - 3 = \underline{\quad}$$

$$19 - 6 = \underline{\quad}$$



$$19 - 3 = \underline{\quad}$$

$$17 - 4 = \underline{\quad}$$



$$17 - 3 = \underline{\quad}$$

Αφαίρεση αριθμών μέχρι το 20



$7 - 2 = \underline{\quad}$ $5 - 3 = \underline{\quad}$ $6 - 3 = \underline{\quad}$ $5 - 4 = \underline{\quad}$
 $17 - 2 = \underline{\quad}$ $15 - 3 = \underline{\quad}$ $16 - 3 = \underline{\quad}$ $15 - 4 = \underline{\quad}$

$7 - 3 = \underline{\quad}$	$6 - 2 = \underline{\quad}$	$6 - 4 = \underline{\quad}$	$4 - 3 = \underline{\quad}$
$17 - 3 = \underline{\quad}$	$16 - 2 = \underline{\quad}$	$16 - 4 = \underline{\quad}$	$14 - 3 = \underline{\quad}$

$5 - 3 = \underline{\quad}$
$15 - 3 = \underline{\quad}$
$25 - 3 = \underline{\quad}$
$35 - 3 = \underline{\quad}$

$7 - 4 = \underline{\quad}$
$17 - 4 = \underline{\quad}$
$27 - 4 = \underline{\quad}$
$37 - 4 = \underline{\quad}$

$8 - 3 = \underline{\quad}$
$18 - 3 = \underline{\quad}$
$28 - 3 = \underline{\quad}$
$38 - 3 = \underline{\quad}$

$4 - 2 = \underline{\quad}$
$14 - 2 = \underline{\quad}$
$24 - 2 = \underline{\quad}$
$34 - 2 = \underline{\quad}$



$12 - 1 = \underline{\quad}$	$16 - 4 = \underline{\quad}$	$12 - 12 = \underline{\quad}$	$17 - 4 = \underline{\quad}$
$17 - 3 = \underline{\quad}$	$13 - 2 = \underline{\quad}$	$15 - 4 = \underline{\quad}$	$19 - 6 = \underline{\quad}$
$16 - 2 = \underline{\quad}$	$14 - 3 = \underline{\quad}$	$19 - 1 = \underline{\quad}$	$17 - 10 = \underline{\quad}$
	$16 - 3 = \underline{\quad}$	$15 - 3 = \underline{\quad}$	$18 - 7 = \underline{\quad}$
	$17 - 2 = \underline{\quad}$	$15 - 5 = \underline{\quad}$	$14 - 2 = \underline{\quad}$